



**Tetrominoes**

**Rule:** Divide the grid into tetrominoes, avoiding black cells, so that two identical tetrominoes cannot share an edge (may touch diagonally). Tetrominoes that are rotations/ reflections of each other are considered identical. Each tetromino is represented with a letter. Cells with letters should belong to the corresponding tetrominoes. Each tetromino may contain at most one letter.

**Answer Format:** For each marked row, write the number of cells that belong to different tetrominoes, ignore the black cells.

**F** →

		O		■			
L							
					T		
		■		T			

**G** →

			L				
	■	O			■		
							I

**H** →

					T		
--	--	--	--	--	---	--	--

**3 Intermediate**  
5 points

**I** →

■							
	Z		T	I			
	O	■					T
					T		
		Z	■				

**J** →

I							I
			T	Z		T	
	■						

**4 Intermediate**  
6 points

### Tetrominoes

**Rule:** Divide the grid into tetrominoes, avoiding black cells, so that two identical tetrominoes cannot share an edge (may touch diagonally). Tetrominoes that are rotations/ reflections of each other are considered identical. Each tetromino is represented with a letter. Cells with letters should belong to the corresponding tetrominoes. Each tetromino may contain at most one letter.

**Answer Format:** For each marked row, write the number of cells that belong to different tetrominoes, ignore the black cells.

**K** →

				■				
	■	■		■		■		
	L		L		L			
				I				
	■		L		L		I	■
					■			
			■					

**5 Challenging**  
8 points

**N** →

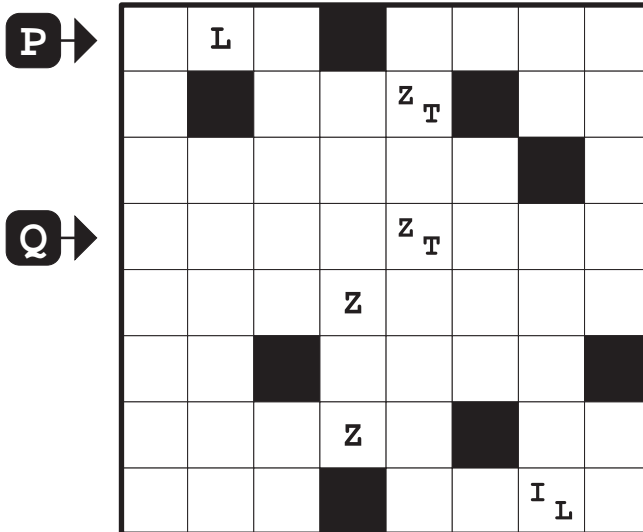


	O		O					L
					I			
I			O			O		
		L			L			I
			I				■	
L					O		O	

**6 Challenging**  
9 points

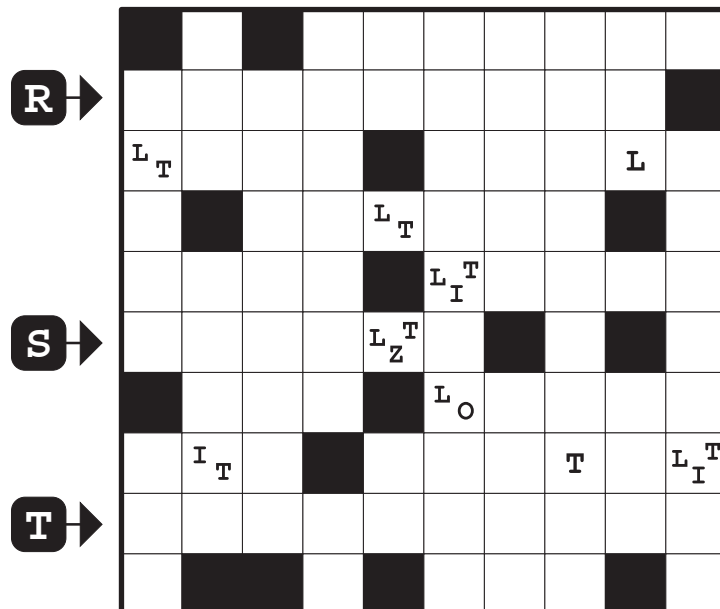
**Tetrominoes**

**Rule:** Solved example for Exploratory Tetrominoes puzzle.

**Answer Format:** For each marked row, write the number of cells that belong to different tetrominoes, ignore the black cells.



**7** Exploratory  
7 points



**8** Exploratory  
10 points